

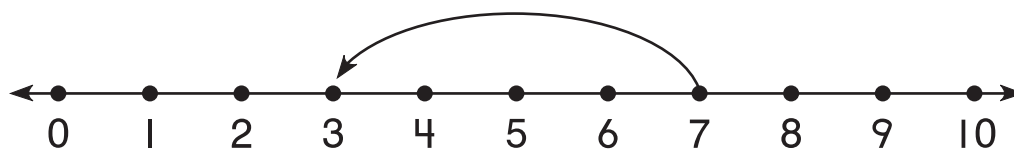
1. What numbers are missing?



3 and 7

---

2. What is the jump?



- 4

---


Compare. Write  $<$ ,  $>$ , or  $=$ .

3.  $7 > 4$

4.  $6 = 6$


**What time is it?**

5.



9 : 00

6.



2 : 00

7. What day is the fifth day of the month?

**SEPTEMBER**

Sunday	Monday	Tuesday	Wednesday	Thursday	Friday	Saturday
				1	2	3
4	5	6	7	8	9	10

Monday

8. Solve.

Hannah had 2 crayons.

Now she has 5 crayons.

How many more crayons did Hannah get?

3 crayons