

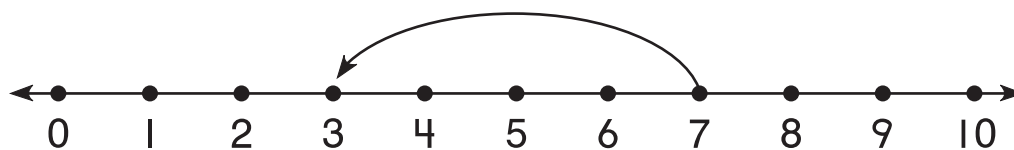
1. What numbers are missing?



\_\_\_\_\_ and \_\_\_\_\_

---

2. What is the jump?



\_\_\_\_\_

---


Compare. Write  $<$ ,  $>$ , or  $=$ .

3.  $7 \bigcirc 4$

4.  $6 \bigcirc 6$


**What time is it?**

5.



\_\_\_\_\_ : \_\_\_\_\_

6.



\_\_\_\_\_ : \_\_\_\_\_

7. What day is the fifth day of the month?

**SEPTEMBER**

Sunday	Monday	Tuesday	Wednesday	Thursday	Friday	Saturday
				1	2	3
4	5	6	7	8	9	10

\_\_\_\_\_

8. Solve.

Hannah had 2 crayons.

Now she has 5 crayons.

How many more crayons did Hannah get?

\_\_\_\_\_ crayons