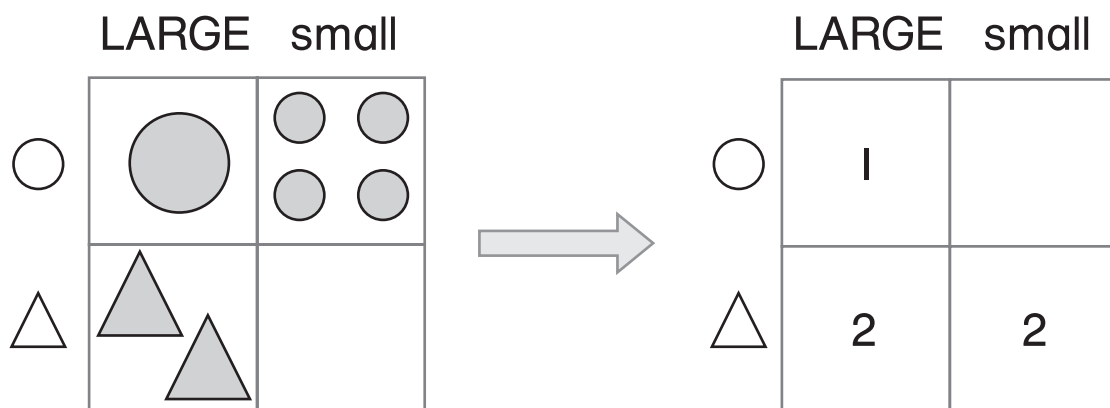






**Use the grids below for Problems 1 and 2.**



**1.** What figures are missing?

- (A) 2 small 
- (B) 2 small 
- (C) 2 large 
- (D) 1 small 

**2.** What number is missing?

- (A) 1
- (B) 2
- (C) 4
- (D) 5

**3.** Which number sentence can help you find the missing number?

3	3	6
1		3
4	5	9

- (A)  $3 + 4 = 7$
- (B)  $1 + 2 = 3$
- (C)  $3 + 3 = 6$
- (D)  $6 + 3 = 9$

**What number is missing?**

4.

2		6
1	0	1
3	4	7

- (A) 1                       (C) 7  
 (B) 4                       (D) 9

5.

3	1	4
2	4	6
5	5	

- (A) 10                       (C) 6  
 (B) 7                       (D) 5

**Solve.**

6. Ann eats 3 carrot sticks. Then she eats 4 more. How many carrot sticks does she eat in all?

- (A) 2                       (C) 4  
 (B) 3                       (D) 7

7. There are 7 trees. Some are oak trees. The rest are pine trees. There are 3 more pine trees than oak trees. How many oak trees are there?

- (A) 1                       (C) 4  
 (B) 2                       (D) 6