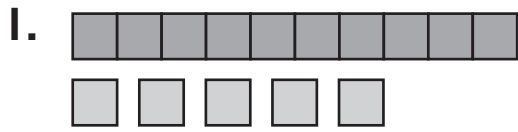
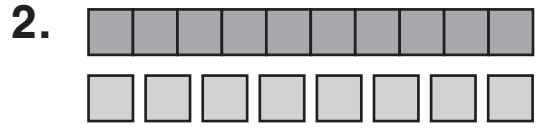


**What numbers are missing?**



$$\begin{array}{r} 10 \\ + 5 \\ \hline 15 \end{array}$$



$$\begin{array}{r} 10 \\ + 8 \\ \hline 18 \end{array}$$

3.



**What is the value?**

4.



23 ¢


5.



31 ¢


**What time is it?**

6.



**3:30**

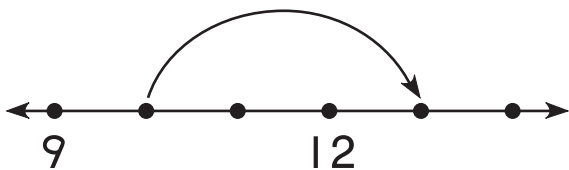
7.



**8:30**

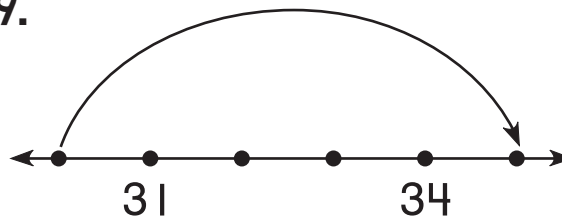
**Write a number sentence to match the jump.**

8.



$$\boxed{10} + \boxed{3} = \boxed{13}$$

9.



$$\boxed{30} + \boxed{5} = \boxed{35}$$

10. Robbie had 1 dime and 4 pennies.  
Then he found 2 dimes.  
How much money does he have now?

**34** ¢