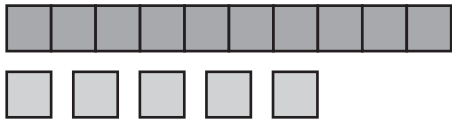
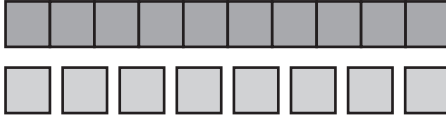


What numbers are missing?

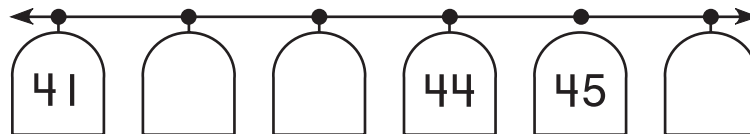
1. 

$$\begin{array}{r}
 \square \\
 + \quad 5 \\
 \hline
 \square
 \end{array}$$

2. 

$$\begin{array}{r}
 10 \\
 + \quad \square \\
 \hline
 \square
 \end{array}$$

3.



What is the value?

4.



_____ ¢


5.



_____ ¢


What time is it?

6.



_____ : _____

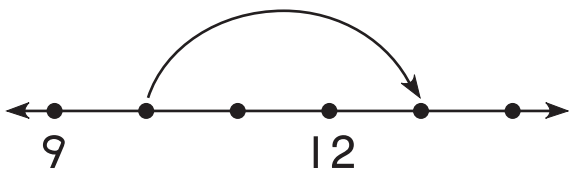
7.



_____ : _____

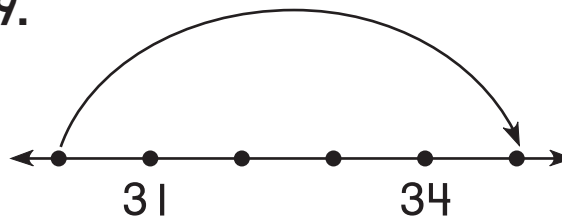
Write a number sentence to match the jump.

8.



$$\square + \square = \square$$

9.



$$\square + \square = \square$$

10. Robbie had 1 dime and 4 pennies.
Then he found 2 dimes.
How much money does he have now?

_____ ¢