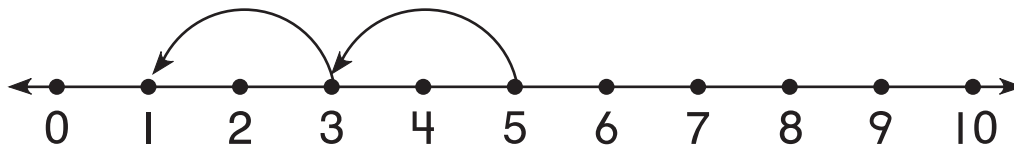


I. What is the missing number?



<b>Start</b>	3	5	7
<b>Land</b>	1	3	<b>5</b>

Complete each number sentence.

2.  $12 + 10 = \underline{22}$

3.  $65 - 10 = \underline{55}$

4.  $15 - 10 = \underline{5}$

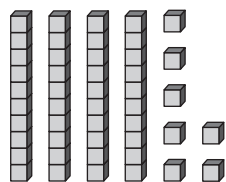
5.  $10 + 89 = \underline{99}$

6. What number is missing?

<b>Start</b>	6	41	53
<b>Jump Forward</b>	4	10	<b>6</b>
<b>Land</b>	10	51	59

**What is the number?**

7.



47

8. twenty-one

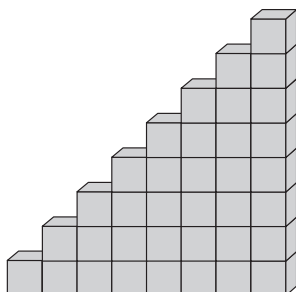
21

9. What is the value?



85 ¢

10. Mayo builds a staircase with blocks.  
How many blocks does he need to make the next step?



9 blocks