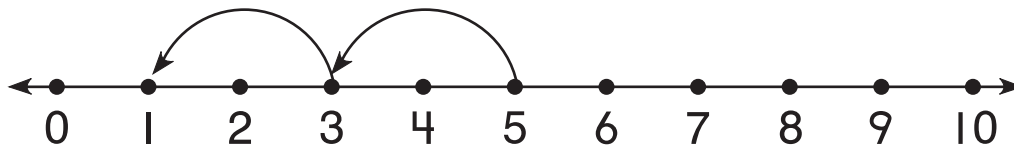


1. What is the missing number?



Start	3	5	7
Land	1	3	

Complete each number sentence.

2. $12 + 10 = \underline{\hspace{2cm}}$

3. $65 - 10 = \underline{\hspace{2cm}}$

4. $15 - 10 = \underline{\hspace{2cm}}$

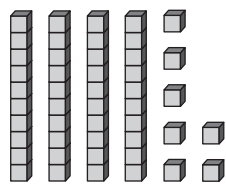
5. $10 + 89 = \underline{\hspace{2cm}}$

6. What number is missing?

Start	6	41	53
Jump Forward	4	10	6
Land	10	51	59

What is the number?

7.



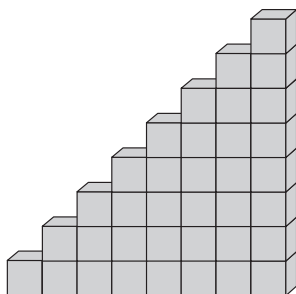
8. twenty-one

9. What is the value?



_____ ¢

10. Mayo builds a staircase with blocks.
How many blocks does he need to make the next step?



_____ blocks