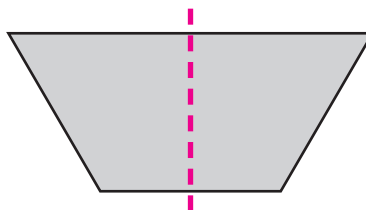
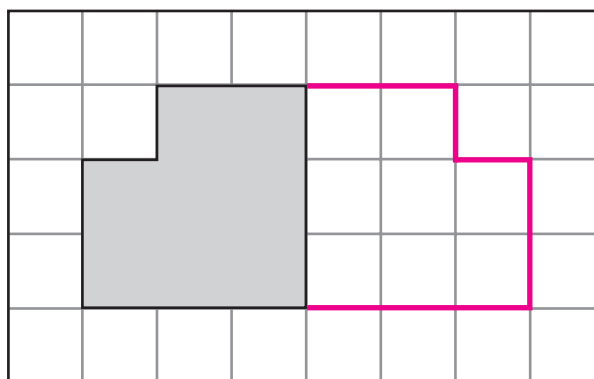


1. Draw a line to show halves. **Answers may vary.**



2. Draw the mirror image of the shape.




3. One sticker costs 40¢.  
How much do two stickers cost?

80 ¢

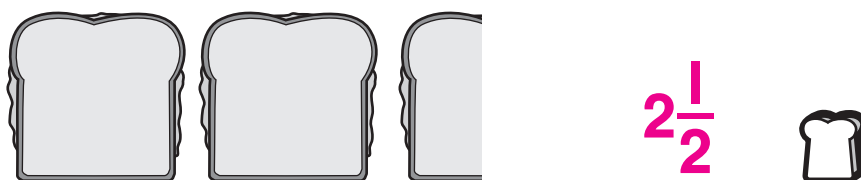
4. 2 friends share 12 crackers equally.  
How many crackers does each friend get?

6 crackers

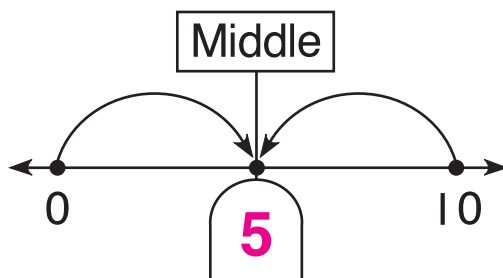
5. Color  $\frac{1}{2}$ .





6. How many are there in all?



7. What number is missing?



8. The ball game starts at 2:00.  
It ends at 6:00.  
What time will it be halfway through the game?



4:00