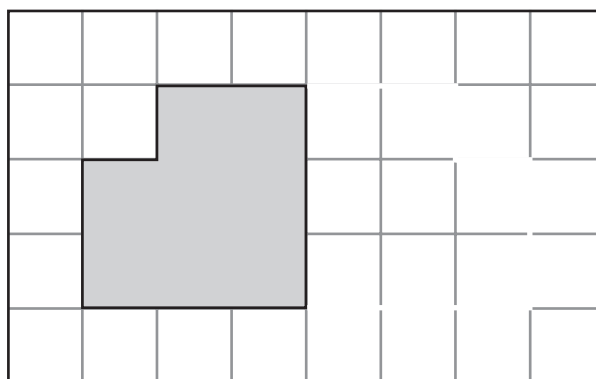


1. Draw a line to show halves.



---

2. Draw the mirror image of the shape.



---

3. One sticker costs 40¢.  
How much do two stickers cost?

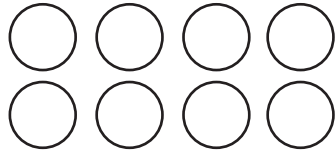
\_\_\_\_\_ ¢

---

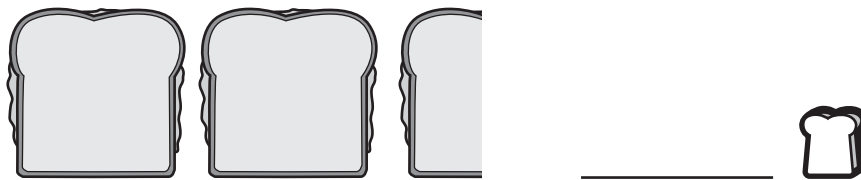
4. 2 friends share 12 crackers equally.  
How many crackers does each friend get?

\_\_\_\_\_ crackers

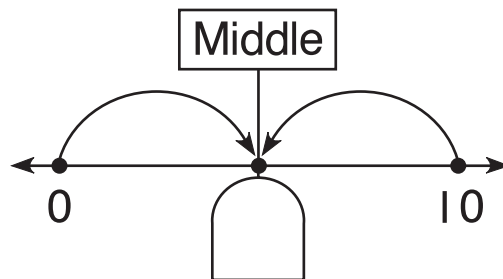
5. Color  $\frac{1}{2}$ .





6. How many are there in all?



7. What number is missing?



8. The ball game starts at 2:00.  
It ends at 6:00.  
What time will it be halfway through the game?



\_\_\_\_\_