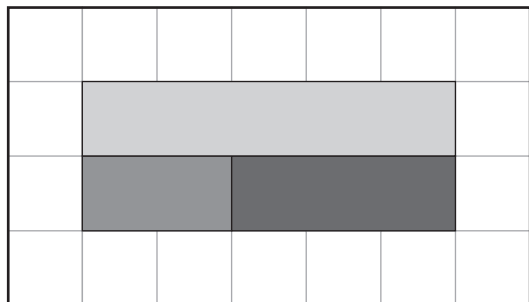


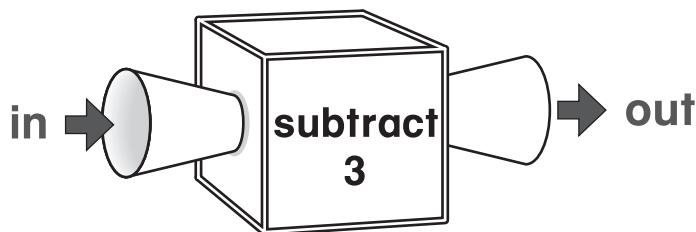
1. What number sentence matches the picture?



- (A) $2 + 4 = 6$
- (B) $4 + 6 = 10$
- (C) $2 + 3 = 5$
- (D) $3 + 5 = 8$

What numbers are missing?

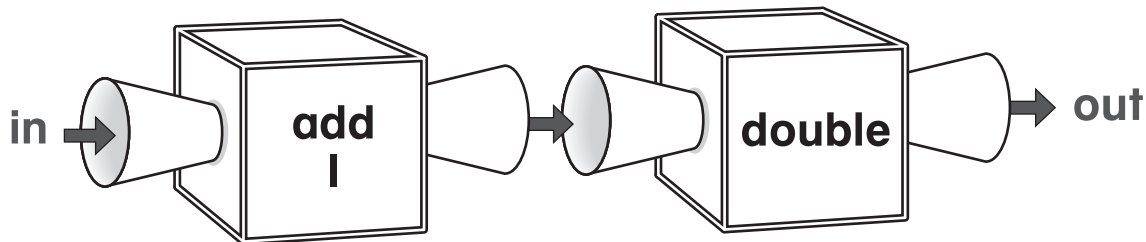
2.



in	7	10	3	12
out	4	?	?	9

- (A) 10 and 3
- (B) 7 and 0
- (C) 7 and 1
- (D) 13 and 6


3.



in	4	2	7	9
out	?	6	?	20

- (A) 8 and 10
- (B) 10 and 6
- (C) 10 and 16
- (D) 10 and 9

4. Which number sentence belongs to the fact family that matches the picture?



- (A) $12 - 6 = 6$
- (B) $12 - 8 = 4$
- (C) $12 + 6 = 18$
- (D) $8 + 6 = 14$

5. Which number sentence can you use to solve the problem?

There are 4 birds in a tree.
6 more birds join them.
How many birds are in the tree now?

- (A) $10 + 6 = 16$
- (B) $6 - 2 = 4$
- (C) $6 - 4 = 2$
- (D) $4 + 6 = 10$

6. What is the rule?

in	8	14	18	4
out	4	7	9	2

- (A) add 4
- (B) subtract 4
- (C) find half
- (D) double