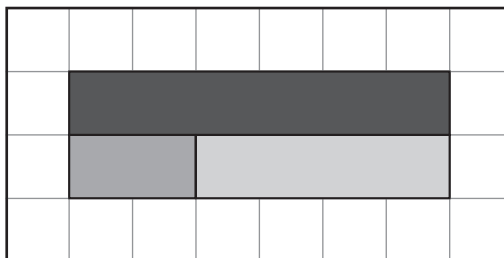


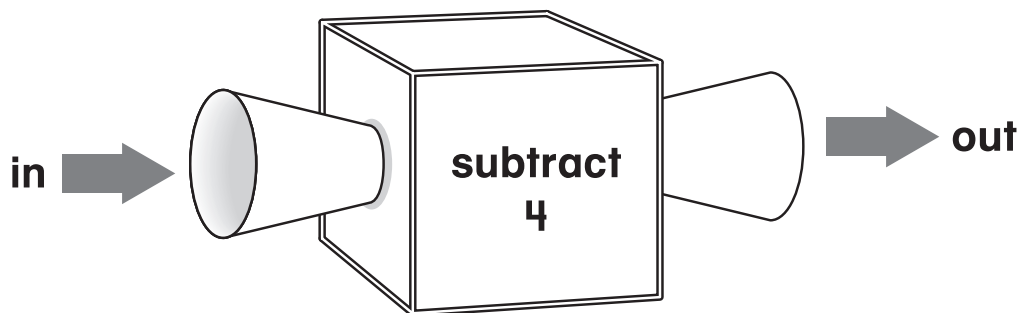
1. Write a number sentence to match the picture.

$2 + 4 = 6$



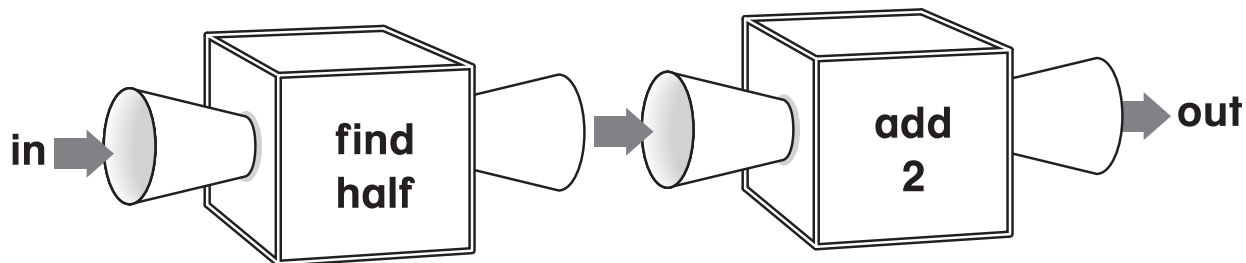
Write the missing numbers.

2.




in	5	11	8	10
out	1	7	4	6

3.



in	6	14	8	18
out	5	9	6	11

4. Write a number sentence that belongs to the fact family that matches the picture.



There are 4
possible answers:

$7 + 8 = 15$

$8 + 7 = 15$

$15 - 7 = 8$

$15 - 8 = 7$

5. Write a number sentence you can use to solve the problem.

There are 3 children on the playground.
 5 more join them.

How many children are on the playground now?

$3 + 5 = 8$

6. What is the rule?

in	3	7	5	8
out	6	14	10	16

double