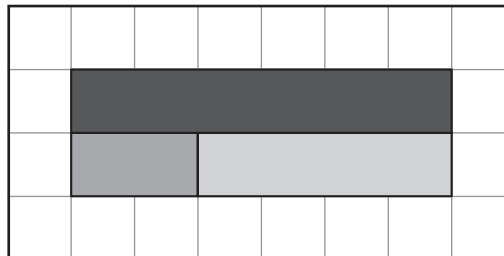


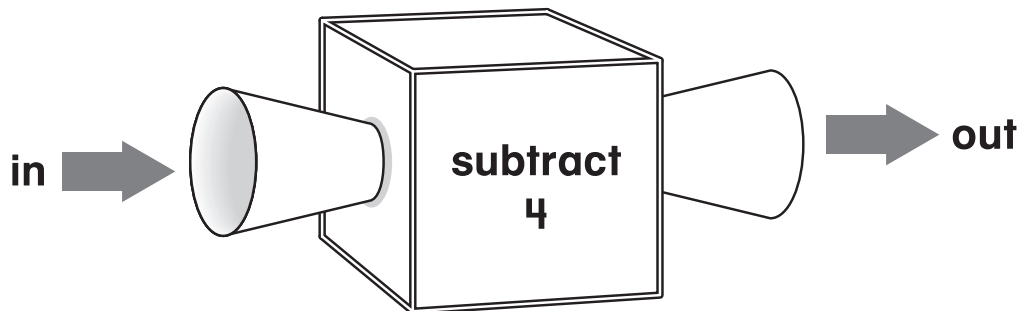
1. Write a number sentence to match the picture.

\_\_\_\_\_



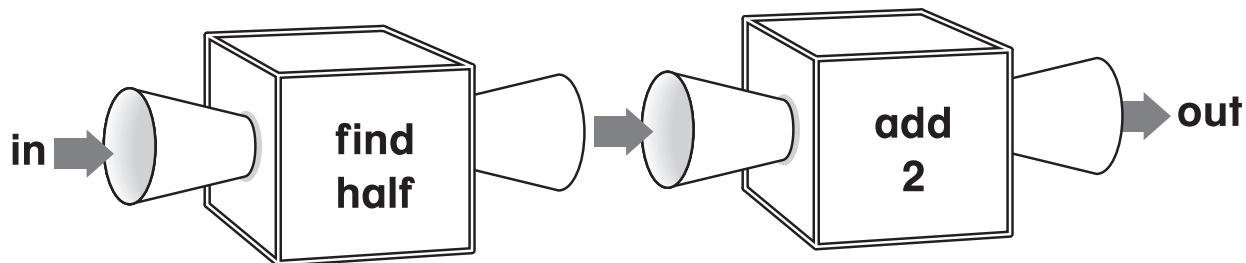
Write the missing numbers.

2.




in	5	11	8	10
out	1		4	

3.



in	6	14	8	18
out			6	11

4. Write a number sentence that belongs to the fact family that matches the picture.



\_\_\_\_\_

5. Write a number sentence you can use to solve the problem.

There are 3 children on the playground.  
5 more join them.  
How many children are on the playground now?

\_\_\_\_\_

6. What is the rule?

in	3	7	5	8
out	6	14	10	16

\_\_\_\_\_