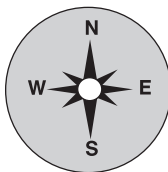
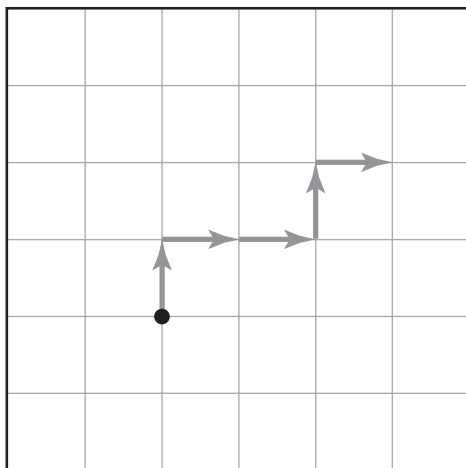


1. What number is missing?

—	2
	4
+	?

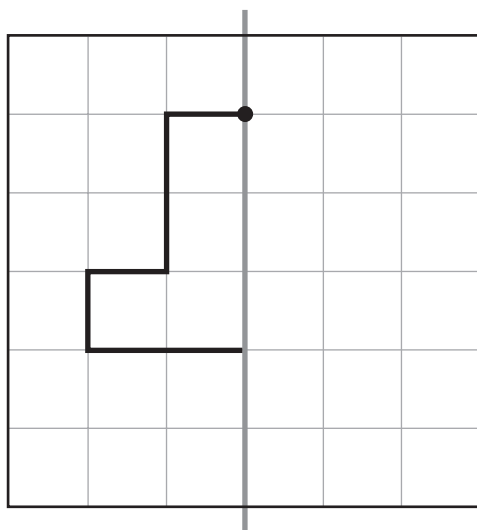
- (A) 2
- (B) 4
- (C) 6
- (D) 8

2. Start at the dot. What are the directions for the path?



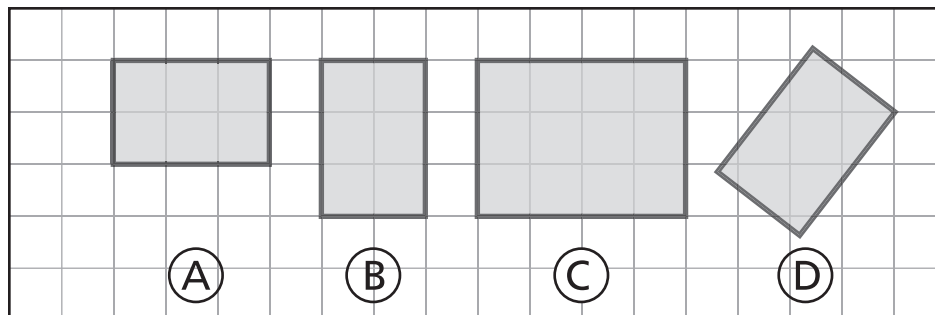
- (A) NWWNW
- (B) NEENE
- (C) SEENW
- (D) SWWSW

3. Start at the dot. Which arrows show the mirror image?



- (A) → ↓ ↓ → ↓ ← ←
- (B) ↓ ↓ ← ↓
- (C) ↓ ← ↓ → → →
- (D) → → ↓ ↓ ↓ → ↓

4. Which figure does not have the same size and shape?




5. What is the figure?



- (A) circle
- (B) cone
- (C) cylinder
- (D) rectangular prism

6. How many different rectangles cover 4 □?



- (A) 1
- (B) 3
- (C) 5
- (D) 12