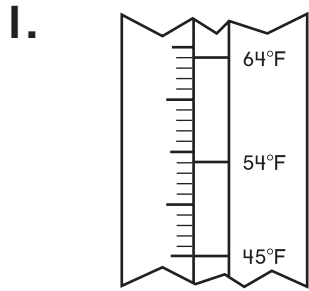
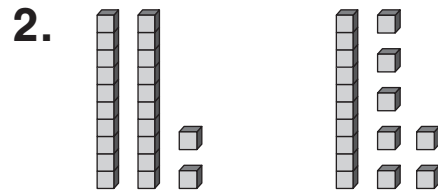


Write <, >, or =.



$64^\circ > 45^\circ$



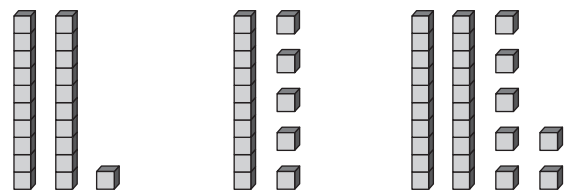
$22 > 17$

3. Write the symbol.



$23 < 31$

4. Write the numbers in order.

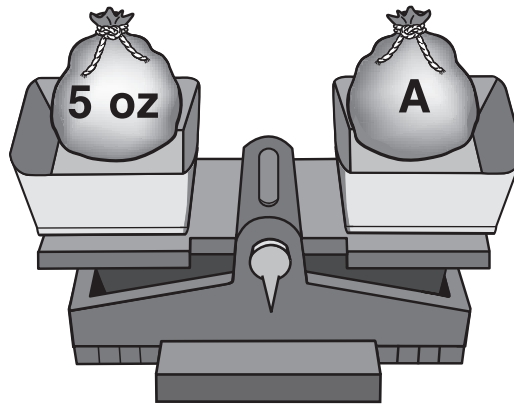


21 15 27
15 < 21 < 27

5. Write $<$, $>$, or $=$.


$$3 + 1 \bigcirc 2 + 1$$

6. How much does A weigh?



5 ounces

7. Write $<$, $>$, or $=$.



19 ounces $>$ 15 ounces

8. Gabi has 4 balloons. They are red, blue, or green. The sentences tell how they compare.

$$\text{blue} < \text{green}$$

$$\text{green} > \text{red}$$

$$\text{blue} = \text{red}$$

How many of each color does she have?

1 red

1 blue

2 green