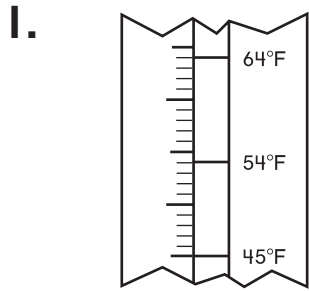
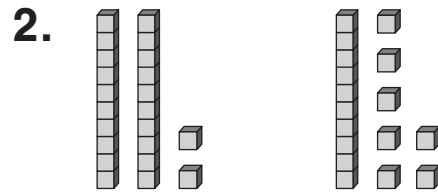


Write <, >, or =.



$64^{\circ} \bigcirc 45^{\circ}$



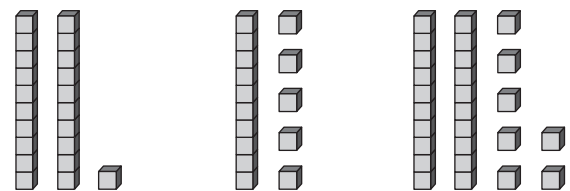
$22 \bigcirc 17$

3. Write the symbol.



$23 \bigcirc 31$

4. Write the numbers in order.



21

15

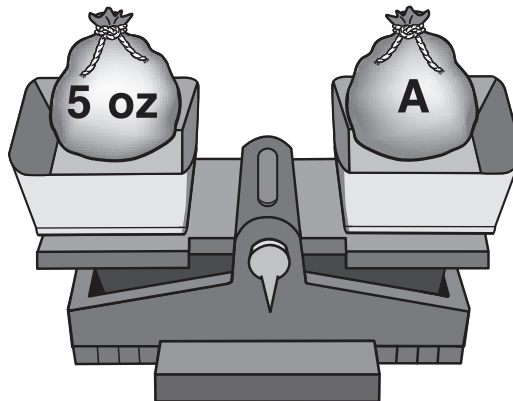
27

_____ < _____ < _____

5. Write $<$, $>$, or $=$.


$3 + 1$ ○ $2 + 1$

6. How much does A weigh?



_____ ounces

7. Write $<$, $>$, or $=$.



19 ounces ○ 15 ounces

8. Gabi has 4 balloons. They are red, blue, or green. The sentences tell how they compare.

$\text{blue} < \text{green}$

$\text{green} > \text{red}$

$\text{blue} = \text{red}$

How many of each color does she have?

_____ red

_____ blue

_____ green