

1. About how long is the crayon?



about **2** paper clips

2. What is the order from shortest to longest?

Yellow

Orange

Blue

yellow, blue, orange

3. Which figure is the smallest?



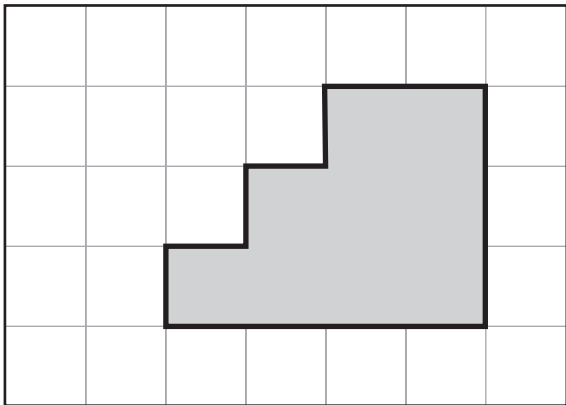


Figure **W**

4. Draw a figure with a larger area. **Answers may vary.**

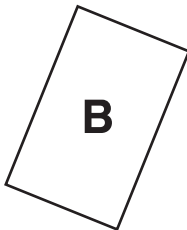



5. What is the area of the shaded figure?



9 

6. Which figure will fit inside of the other?



B will fit inside of A.

7. Order the mugs from holds the most to holds the least.



L

M

N

N, L, M

8. How many different rectangles can you make with 8 square tiles?

4 rectangles