


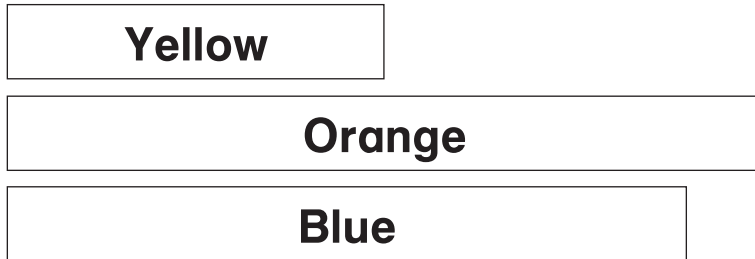
1. About how long is the crayon?



about \_\_\_\_\_ paper clips

---

2. What is the order from shortest to longest?



---


3. Which figure is the smallest?



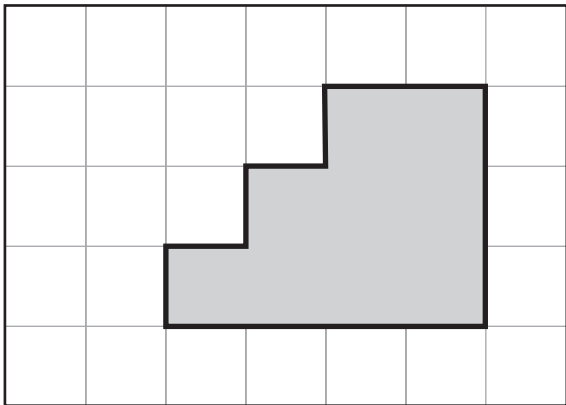
Figure \_\_\_\_\_

---

4. Draw a figure with a larger area.

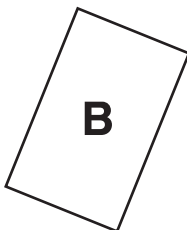



5. What is the area of the shaded figure?



\_\_\_\_\_ 

6. Which figure will fit inside of the other?



\_\_\_\_\_

7. Order the mugs from holds the most to holds the least.



**L**



**M**



**N**

\_\_\_\_\_

8. How many different rectangles can you make with 8 square tiles?

\_\_\_\_\_ rectangles