

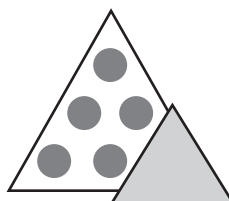


1. Is the sum even or odd?



  
 odd + even = \_\_\_\_\_



2. Write the number sentence.


  
 -  =

3. Complete the puzzle. Use multiples of 10.

	20	30
30		
	20	60

4. Write a number sentence to match the picture.



  
 +  =

5. Complete the puzzle.

6	3	
		7
	6	

---

**What is the sum?**

6.  $8 + 7 =$  \_\_\_\_\_

7.  $8 + 9 =$  \_\_\_\_\_

---

**Problem Solving**

8. There are 5 boys and 6 girls in the garden. There are 5 boys and 4 girls in the pool. How many children in all are in the garden and the pool?

\_\_\_\_\_ children