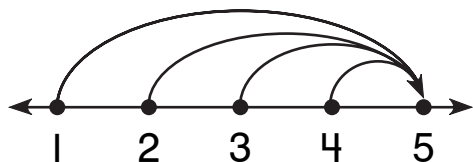


Addition Patterns on the Number Line

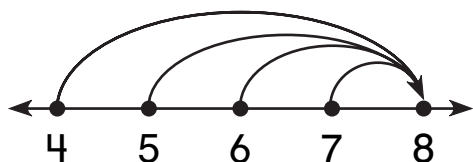
Write the missing numbers to show each jump.

1.



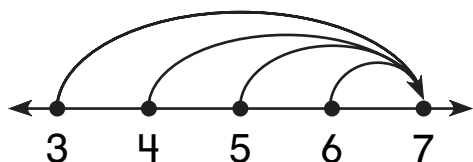
1	2		
+ 4	+ 3	+	+
5	5	5	5

2.



+	+	+	+
8	8	8	8

3.



+	+	+	+
7	7	7	7