


Counting Money

P is a penny, worth 1¢.


N is a nickel, worth 5¢.

**How many coins are there?
What is the value?**

1. 


9 coins

45 ¢

2. 


_____ coins

_____ ¢

3. 


_____ coins

_____ ¢

4. 


_____ coins

_____ ¢

5. 

_____ coins

_____ ¢

6. 

_____ coins

_____ ¢

7. Look at Problems 1 to 6. What do you notice?
