

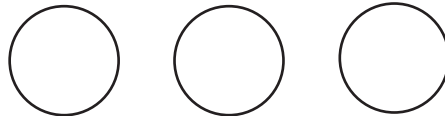
# Using Quarters to Make Amounts

What 3 coins will make each amount?


1. 27¢



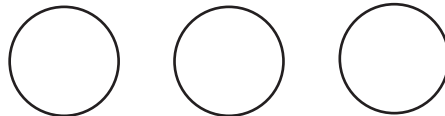
2. 36¢



3. 51¢

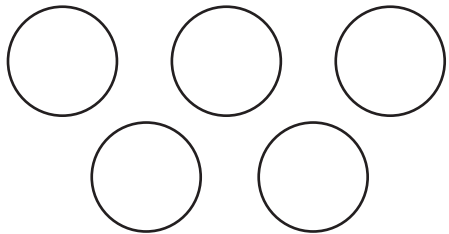


4. 60¢

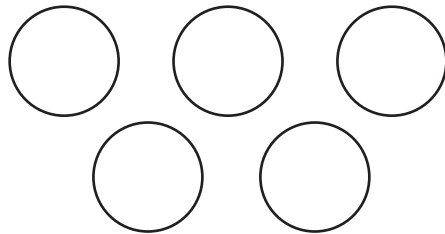


What 5 coins will make each amount?

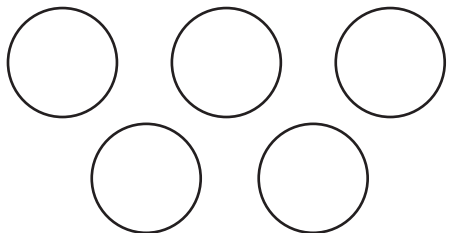
5. 37¢



6. 46¢



7. 86¢



8. 95¢

