
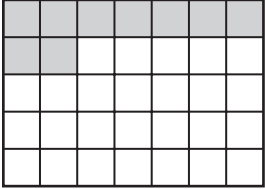




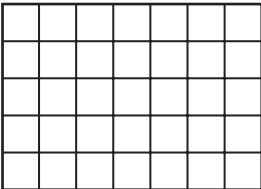

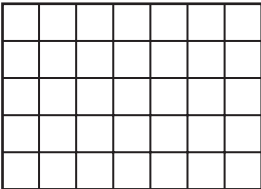


Using a Calendar to Find Half

There are 7 days in 1 week.

S	M	T	W	T	F	S

Complete the table.
Color each calendar and write the missing numbers.

	Total	Half
1.	 <p>2 weeks and 4 days</p>	<p>_____ week and _____ days</p> 
2.	 <p>3 weeks and 3 days</p>	<p>_____ week and _____ days</p> 
3.	 <p>1 week and 5 days</p>	<p>_____ weeks and _____ days</p> 
4.	 <p>_____ weeks and _____ days</p>	<p>1 week and 3 days</p> 
5.	 <p>3 weeks and 1 day</p>	<p>1 week and _____ days</p> 