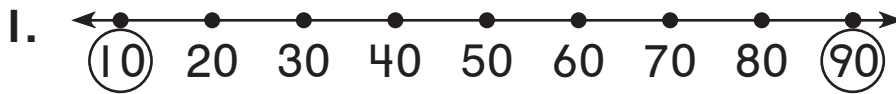
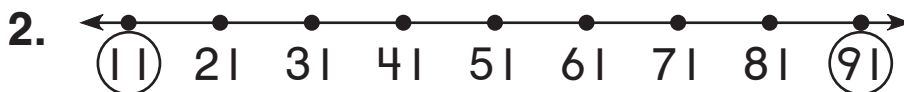


Halving Larger Numbers

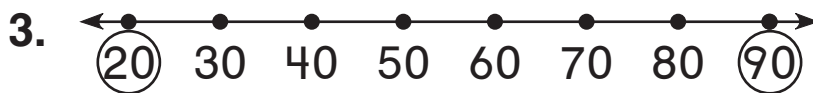
Find the number in the middle.



_____ is halfway
between 10
and 90.



_____ is halfway
between 11
and 91.



_____ is halfway
between 20
and 90.



_____ is halfway
between 23
and 93.



_____ is halfway
between 40
and 70.



_____ is halfway
between 38
and 68.