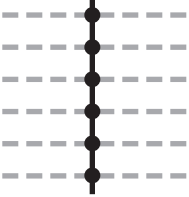








Drawing Lines and Intersections

Draw each map to match the table below.
Complete the table.

<p>A</p> 	<p>B</p> 	<p>C</p> 
<p>D</p> 	<p>E</p> 	<p>F</p>
<p>G</p> 	<p>H</p>	<p>I</p> 

	A	B	C	D	E	F	G	H	I
—		5			1		3		
	1		4	2					2
+	6	10	12	12	5	7	15	9	8