





# Finding and Tallying Three-Dimensional Figures

1. Look around the room. Make tally marks to show how many of each type of figure you see.

| Figures I See  |  |
|--|--|
| <b>sphere</b>               |  |
| <b>cylinder</b>             |  |
| <b>cone</b>                |  |
| <b>rectangular prism</b>  |  |

2. Which figure did you see most?

---

---

3. Which figure did you see least?

---

---