




Finding How Many Figures

Number of Blocks in Each Size and Shape			
Size	Triangles 	Squares 	Circles 
Smallest	1	3	2
In-Between	3	2	4
Largest	1	2	0

Use the table above to find how many.

Triangles _____	Squares _____	Circles _____
Smallest Figures _____	In-Between Figures _____	Largest Figures _____
Smallest Triangles _____	In-Between Squares _____	Largest Circles _____
Figures that are not triangles _____	Figures that are not squares _____	Figures that are not circles _____