



Sum Code


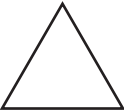
Use the secret code to fill in the missing numbers. Then find each sum.



Secret Code			
 6	 7	 8	 9

1.  +  = _____

2.  +  = _____

3.  +  = _____

4.  +  = _____

5.  +  = _____

6.  +  = _____