




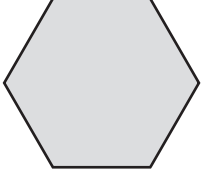


Buying Pattern Blocks

Pattern Block Prices					
tan	green	blue	orange	red	yellow
					
1¢	2¢	3¢	4¢	5¢	6¢

Use the Pattern Block Prices list.

1. Vicki bought 4 blue blocks. Tim bought 1 tan block and 2 yellow blocks. Who spent more money? How much more?

2. Madeline has 11¢. She wants to buy 2 blocks that are the same. Which color block can Madeline NOT buy? Why not?

3. Gary bought 3 more tan blocks than yellow blocks. He bought twice as many tan blocks as blue blocks. He bought 1 yellow block. How much money did Gary spend?
