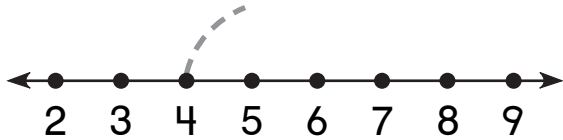


Relating Addition and Subtraction

NCTM Standards 1, 2, 6, 9, 10

Draw the jump. Find the missing numbers.

1.

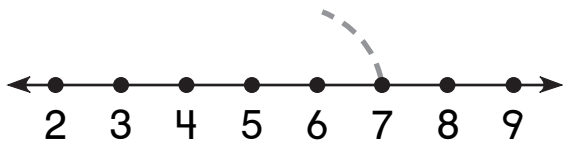


4

+ 3

7

2.

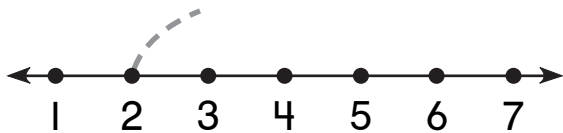


7

- 3

□

3.

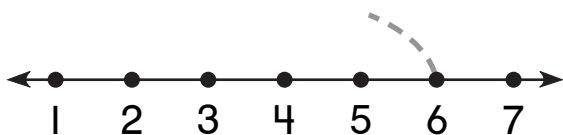


2

□

6

4.



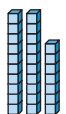
6

□

2

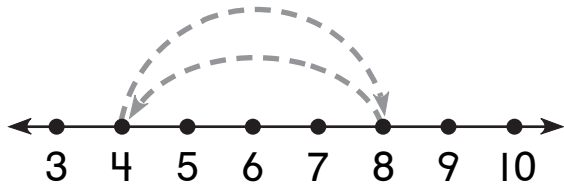


NOTE: Your child is learning that addition and subtraction *undo* each other. If you jump forward 3 spaces on the number line then jump backward 3 spaces, you will end up where you started.



Draw the jump. Find the missing numbers.

5.



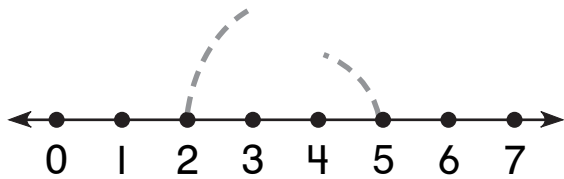
4

8

+ 4

- 4

6.



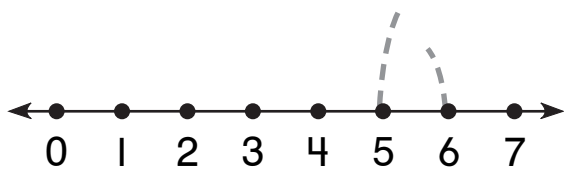
2

5

+ 3

- 3

7.



5

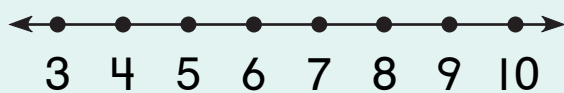
6

6

5

Challenge

8.



9

+ 6

- 6

9

