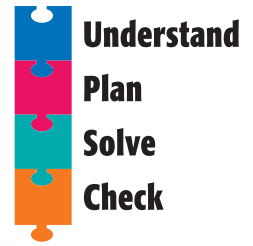




Problem Solving Strategy

Work Backward

NCTM Standards 1, 2, 4, 6, 7, 8, 9, 10



1. Cary plays outside for 2 hours.
He stops at 5 o'clock.
What time did Cary start playing?



2. Abby had 7 baseball cards.
Now she has 9 cards.
How many more cards did she get?

_____ more cards

3. Steve and his sister have 10 minutes
until bedtime.
They play a game for 4 minutes.
How much more time do they have to play?

_____ minutes



NOTE: Your child is exploring different ways to solve problems. Sometimes you need to use the information and work backward to solve a problem.

