

Write how much in the table.

5.



6.



7.



8.



9.



10.



How Much?


	How Much?
5.	6 ¢
6.	_____ ¢
7.	_____ ¢
8.	_____ ¢
9.	_____ ¢
10.	_____ ¢

Challenge

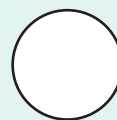
Write <, =, or >.

2 < 3 2 = 2 2 > 1

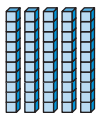
11.



12.



50



fifty

L



10

