





# Using Cross Number Puzzles to Add

NCTM Standards 1, 2, 3, 6, 8, 9, 10

Complete each puzzle.

1.

○ □





Green		
Blue		

→

2	1	3
3		

2.





LARGE small

△		
□		

→


3.

Blue Green

LARGE		
small		

→




**NOTE:** Your child is learning to count objects in a grid and to record the numbers in a Cross Number Puzzle. In these puzzles, sums of objects in rows and columns are recorded in the bottom row and in the right column.

4. What are the missing numbers?

	L	T	
Green	L L L	T T T	
Blue	L L L L L	T T T T	

➔

3		

5. What are the missing letters and sums?

	Green	Blue	
M			
W			

➔

4	2	
3	0	

### Challenge

6. What are the missing numbers and shapes?

	Green	Blue	
○			
□			

➔

3	2	
	4	6