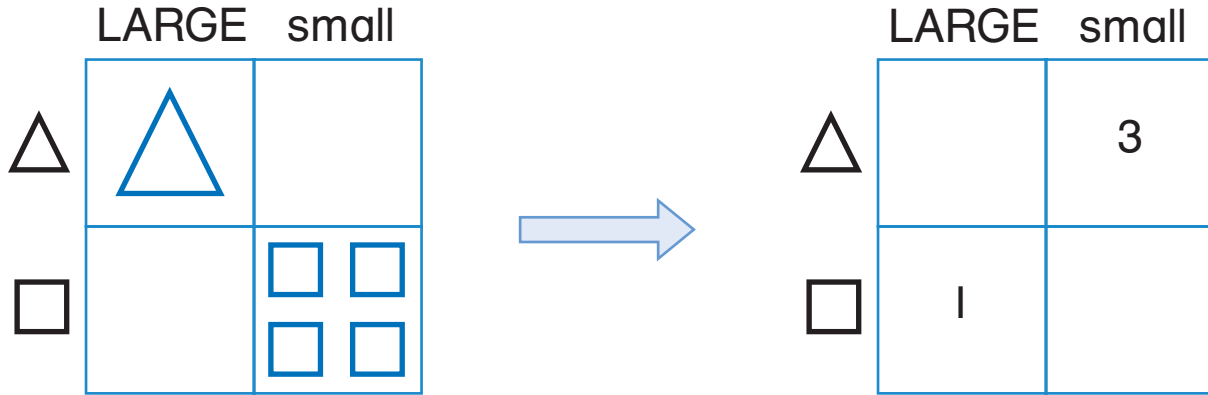


Chapter 4

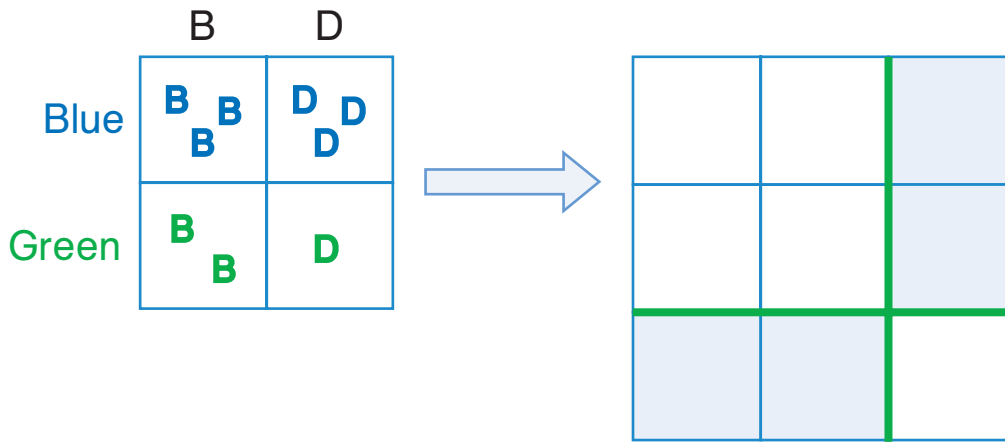
Review/Assessment

NCTM Standards 1, 2, 5, 6, 7, 8, 9, 10

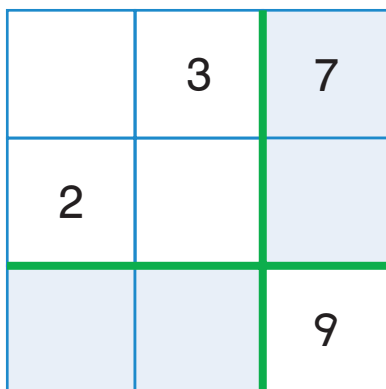
1. What figures are missing? Lesson 1
 What numbers are missing?



2. What numbers are missing? Lesson 2



3. What numbers are missing? Lesson 3



	+	3	=	7
2	+		=	2

		3
+ 2	+	

What numbers are missing? Lessons 4 and 5

4.

		5
	4	
	7	9

5.

3		8
5		10

Solve each problem. Lessons 6 and 7

6. Marcy picked 4 tulips.
Her mother gave her 5 roses.
How many flowers does Marcy
have now?

_____ flowers

7. There are 10 boys in the park.
Four are on the playground.
The rest are on the grass.
How many are on the grass?

_____ boys

Problem Solving Lesson 8

8. Mark sees some frogs and turtles.
He sees 5 animals in all.
There is 1 more frog than there are turtles.
How many of each kind of animal
does Mark see?

_____ frogs

_____ turtles