





Problem Solving Test Prep

1. Justin made a pattern with figures.



Which figure is missing?

- (A) 
- (B) 
- (C) 
- (D) 

2. Deandre had 1 nickel and 3 pennies. Then he earned 10¢. How much money does he have now?

- (A) 10¢
- (B) 15¢
- (C) 18¢
- (D) 23¢



Show What You Know

3. Fiona has some nickels and pennies. She has 11¢ in all. How many of each type of coin could she have?

_____ nickels

_____ pennies

Explain how you know your answer makes sense.

4. Kelly, Josh, and May are in line. Kelly is in front of Josh. May is right behind Kelly. Who is first?

_____ is first.

Explain how you know your answer is correct.
