

Tens and Time

NCTM Standards 1, 4, 6, 10

What time is it?

1.



2.



3.



4.



NOTE: Your child is learning to tell time to the half-hour. For times on the half-hour, have your child describe the positions of the hour hand and minute hand on a clock and tell what time it is.


Draw the hour hand and the minute hand.

5.




The time is 8:30.

2 hours
later





The time is 10:30.

6.



The time is 1:30.

3 hours
later





The time is 4:30.

7.



The time is 6:30.


1 hour
later



The time is : .

Problem Solving

8. A movie begins at 11:00.
It is two and one-half hours long.
What time does it end?



The movie ends at : .