

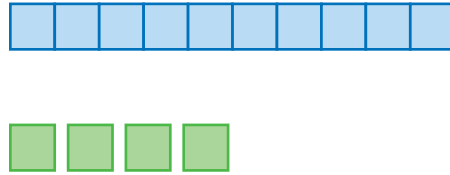
Chapter 5

Review/Assessment

NCTM Standards 1, 2, 6, 7, 8, 9, 10

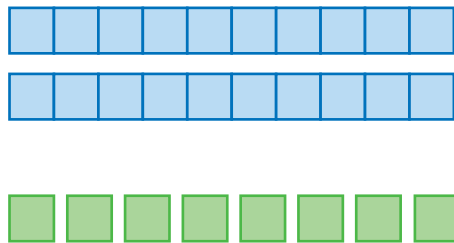
What numbers are missing? Lesson 1, 2, and 7

1.



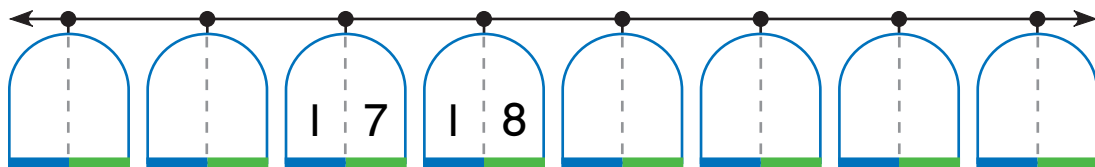
$$\begin{array}{r} 10 \\ + 4 \\ \hline \end{array}$$

2.



$$\begin{array}{r} 20 \\ + 8 \\ \hline \end{array}$$

3.



How many coins are there? What is the value? Lesson 3

4.



_____ coins

_____ ¢

5.



_____ coins

_____ ¢

What time is it? Lesson 4

6.

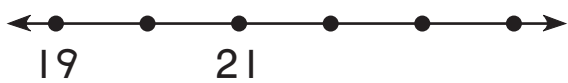


7.



Draw the jump. Complete the number sentence. Lesson 5, 6, and 7

8.



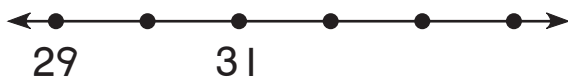
$$\boxed{20} + \boxed{3} = \boxed{}$$

9.



$$\boxed{10} + \boxed{} = \boxed{15}$$

10.



$$\boxed{} + \boxed{4} = \boxed{34}$$

11.



$$\boxed{20} + \boxed{} = \boxed{21}$$

Problem Solving Lesson 8

12. Julio has 3 dimes and 2 pennies.
He finds 1 more dime and 4 more pennies.
How much money does he have now?

_____¢