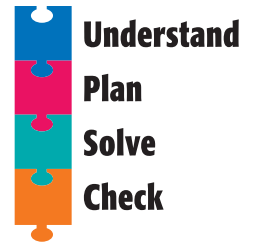


Problem Solving Strategy

Make a Table




NCTM Standards 1, 2, 5, 6, 7, 8, 9, 10



Complete the table to solve the problem.

1. How many more children chose apples than grapes?



Favorite Kind of Fruit	
apples	grapes
bananas	bananas
apples	apples
grapes	apples
bananas	grapes
bananas	apples

Favorite Kind of Fruit	
 apples	
 grapes	
 bananas	

_____ more children

2. What are all the ways to add two numbers to get a sum of 10?

$$\square + \triangle = 10$$

	0										
	10										

_____ ways

NOTE: Your child is exploring different ways to solve problems. Making a table can help to organize the information you need to solve a problem.

