


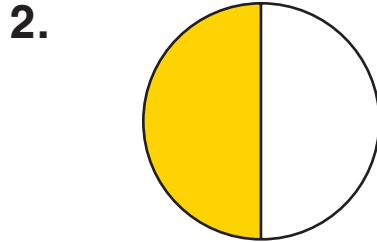
# Exploring One Half

NCTM Standards 1, 2, 3, 6, 7, 8, 9, 10

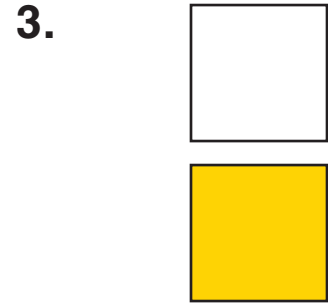
## Is one half shaded?



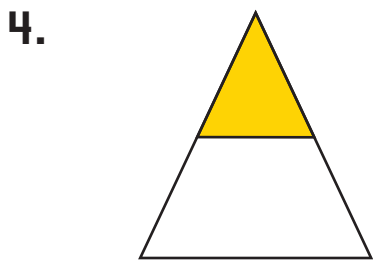
yes  
no




yes  
no




yes  
no



yes  
no




yes  
no

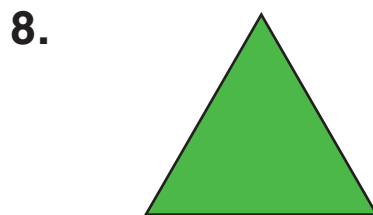


yes  
no


## How much is shaded?



\_\_\_\_\_



\_\_\_\_\_



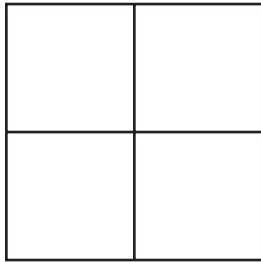
\_\_\_\_\_



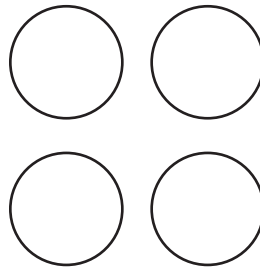
**NOTE:** Your child is learning to find half of an object and half of a set of objects. Ask your child to find half of a collection of objects in your home.

Color one half.

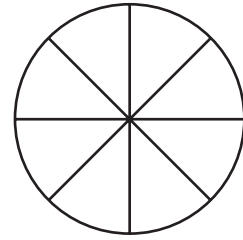
10.




11.



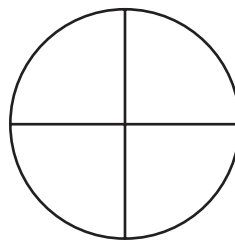
12.



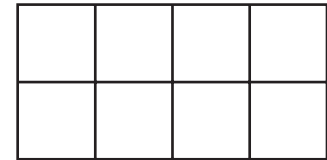
13.



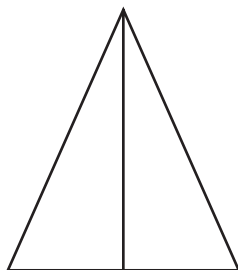
14.



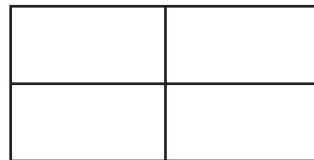
15.



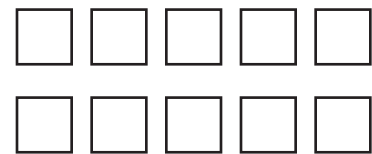
16.



17.



18.



## Problem Solving

19. Talia wants to buy a pack of stickers.  
The stickers costs 60¢.  
The store is having a half-off sale.  
What is the sale price?

\_\_\_\_\_¢