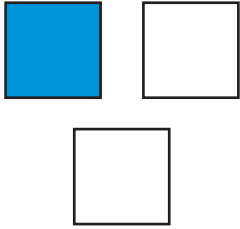


Thirds

NCTM Standards 1, 6, 7, 8, 9, 10

Is one third blue?

1.



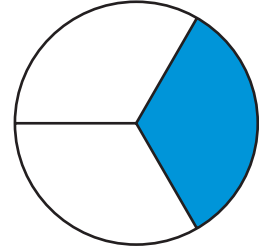
yes no

2.



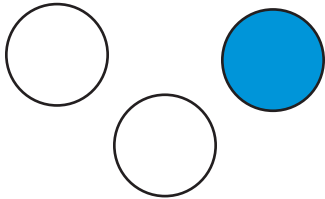
yes no

3.



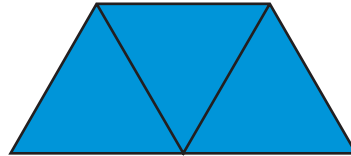
yes no

4.



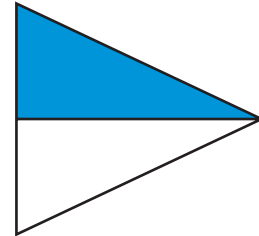
yes no

5.



yes no

6.



yes no

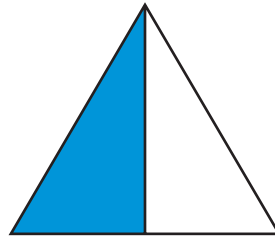
How much is blue?

7.



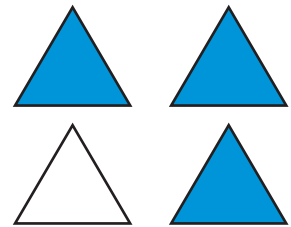
2 out of 3
equal parts $\frac{2}{3}$

8.



_____ out of _____
equal parts

9.



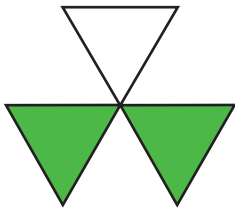
_____ out of _____
equal parts



NOTE: Your child is learning to identify and write thirds. Ask your child to identify the parts of Problems 1 to 6 that are not shaded.

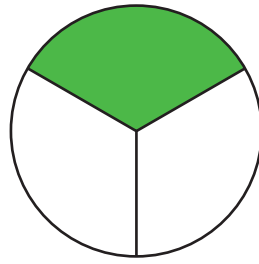
Write a fraction for the green part.

10.



$\frac{2}{3}$

11.



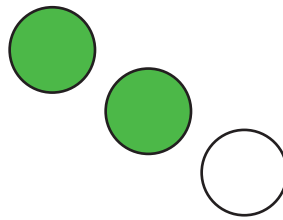
12.



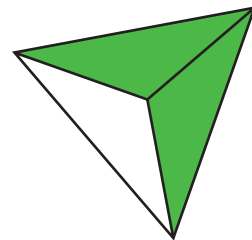
13.



14.



15.



Challenge

Write $<$ or $>$.

16. $\frac{1}{3}$ ○ $\frac{2}{3}$

17. $\frac{1}{2}$ ○ $\frac{1}{3}$