
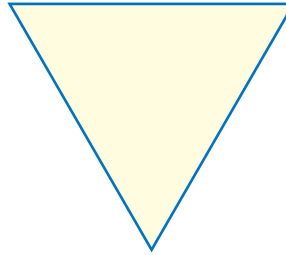


Draw a line to show halves. Lesson 1


1.



2.

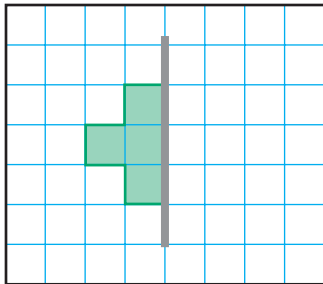


3.

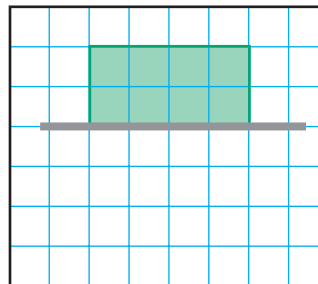


Draw the mirror image. Lesson 1

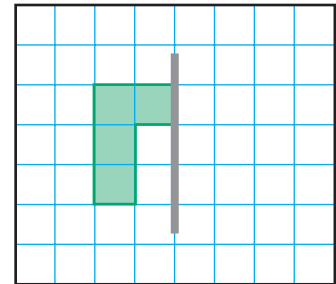
4.



5.



6.



Complete each sentence. Lessons 2 and 3

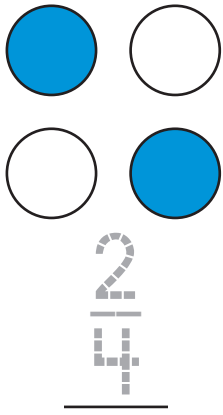
7. If one book costs 25¢,
then two books cost _____¢.

8. Two friends share 40 pennies equally.

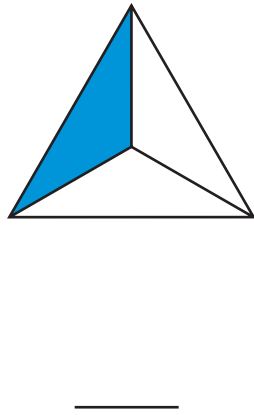
Each friend gets _____ pennies.

Write a fraction for the shaded part. Lessons 4, 7, and 8


9.



10.





11.




How many are there? Lesson 5

12.



13.

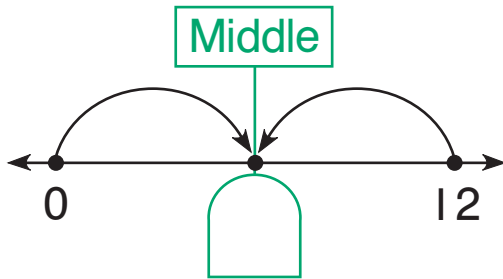


14.

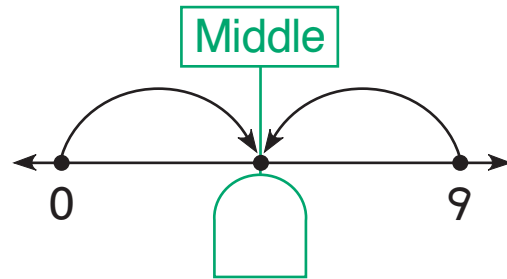


What number is in the middle? Lesson 6

15.



16.



Problem Solving Lesson 9

17. The school play begins at 1:30 and ends at 3:30.
What time will it be halfway through the play?

