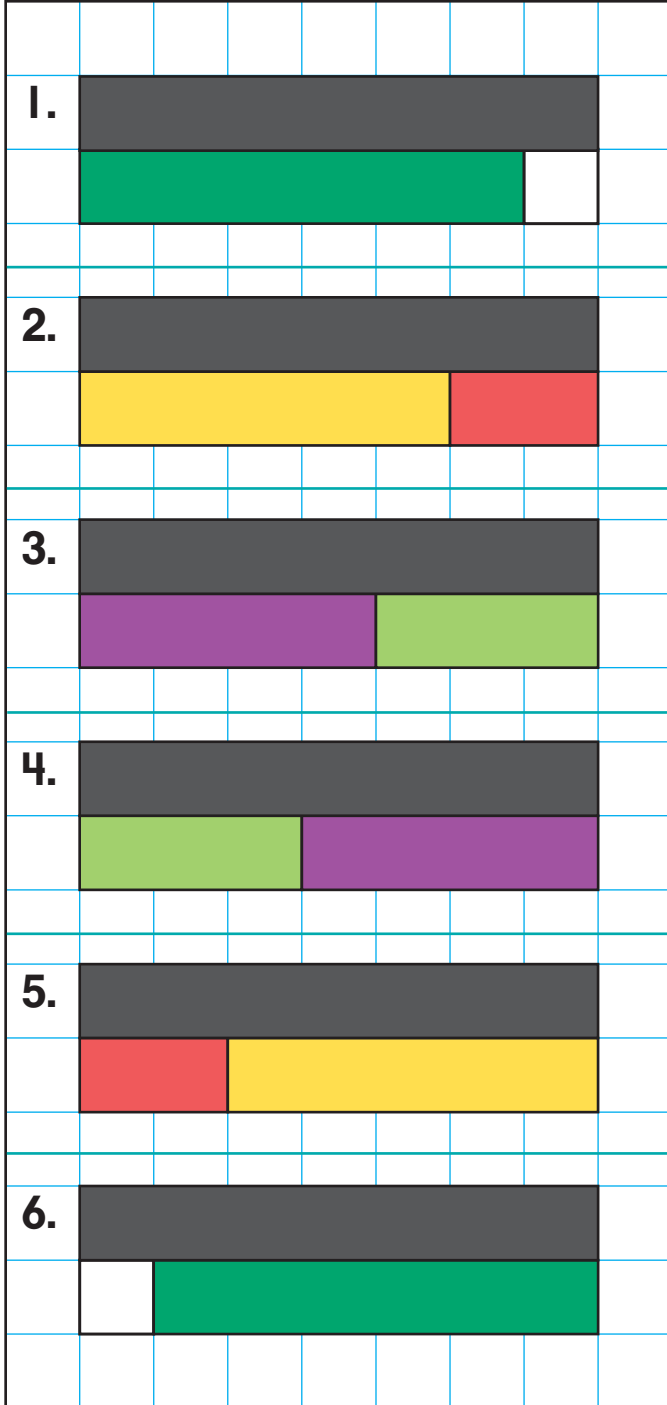


# Recording Addition Sentences

NCTM Standards 1, 2, 6, 9, 10

Complete each addition sentence.

If  $\boxed{W} = 1$ , then...



$$\boxed{6} + \boxed{1} = \boxed{7}$$

$$\boxed{\phantom{0}} + \boxed{\phantom{0}} = \boxed{7}$$

$$\boxed{\phantom{0}} + \boxed{\phantom{0}} = \boxed{7}$$

$$\boxed{\phantom{0}} + \boxed{\phantom{0}} = \boxed{7}$$

$$\boxed{\phantom{0}} + \boxed{\phantom{0}} = \boxed{7}$$

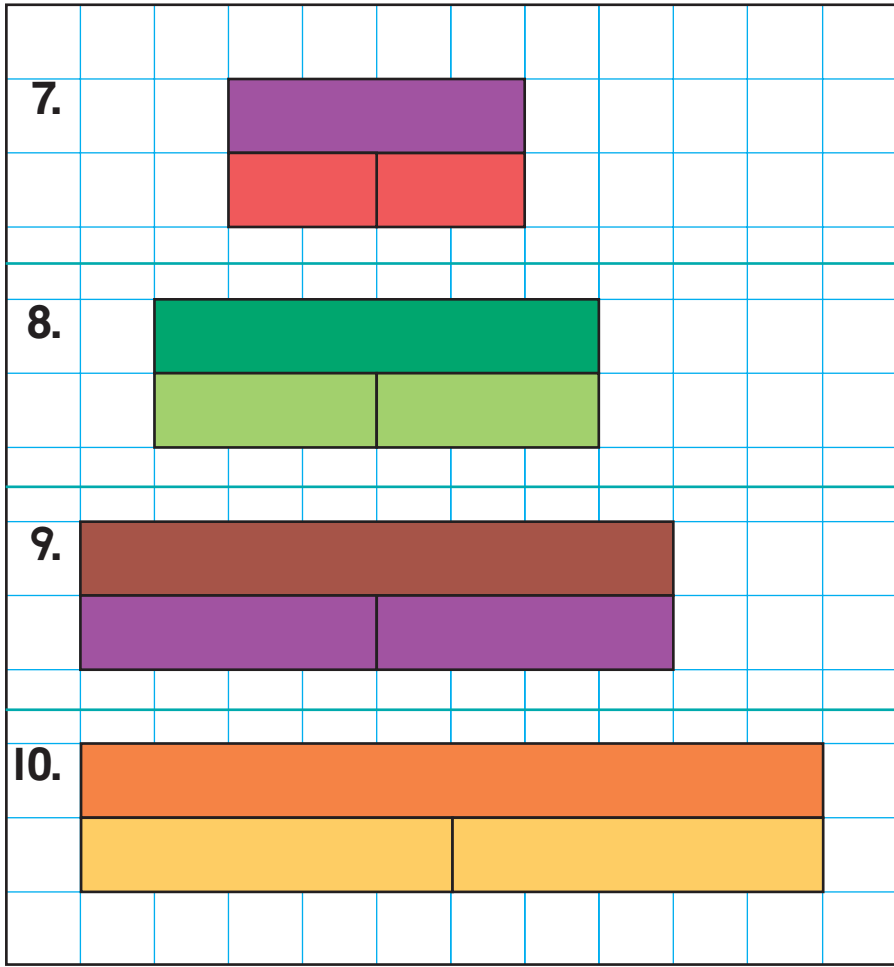
$$\boxed{\phantom{0}} + \boxed{\phantom{0}} = \boxed{7}$$



**NOTE:** Your child is learning to find different ways to make the same number. Ask your child to find at least two ways to make a sum of 5.

Complete each addition sentence.

If  $\boxed{W} = 1$ , then...



$$\boxed{2} + \boxed{2} = \boxed{4}$$

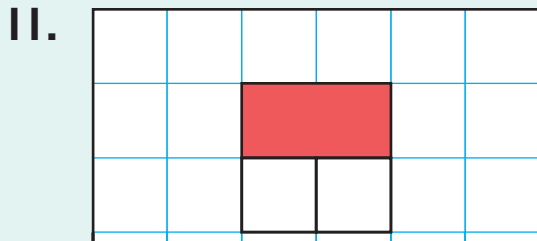
$$\boxed{\phantom{00}} + \boxed{\phantom{00}} = \boxed{\phantom{00}}$$

$$\boxed{\phantom{00}} + \boxed{\phantom{00}} = \boxed{\phantom{00}}$$

$$\boxed{\phantom{00}} + \boxed{\phantom{00}} = \boxed{\phantom{00}}$$

**Challenge**

If  $\boxed{W} = 2$ , then...



$$\boxed{2} + \boxed{2} = \boxed{\phantom{00}}$$



$$\boxed{\phantom{00}} + \boxed{\phantom{00}} = \boxed{\phantom{00}}$$