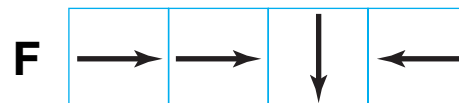
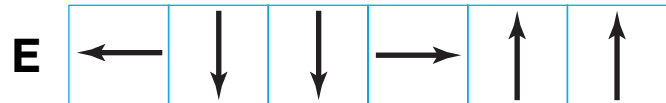
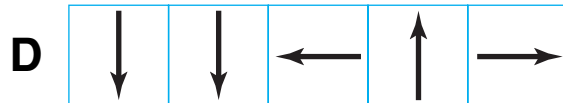
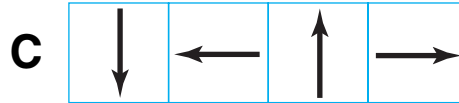
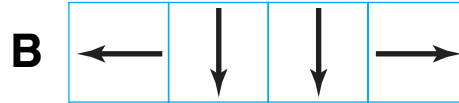
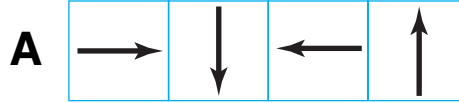
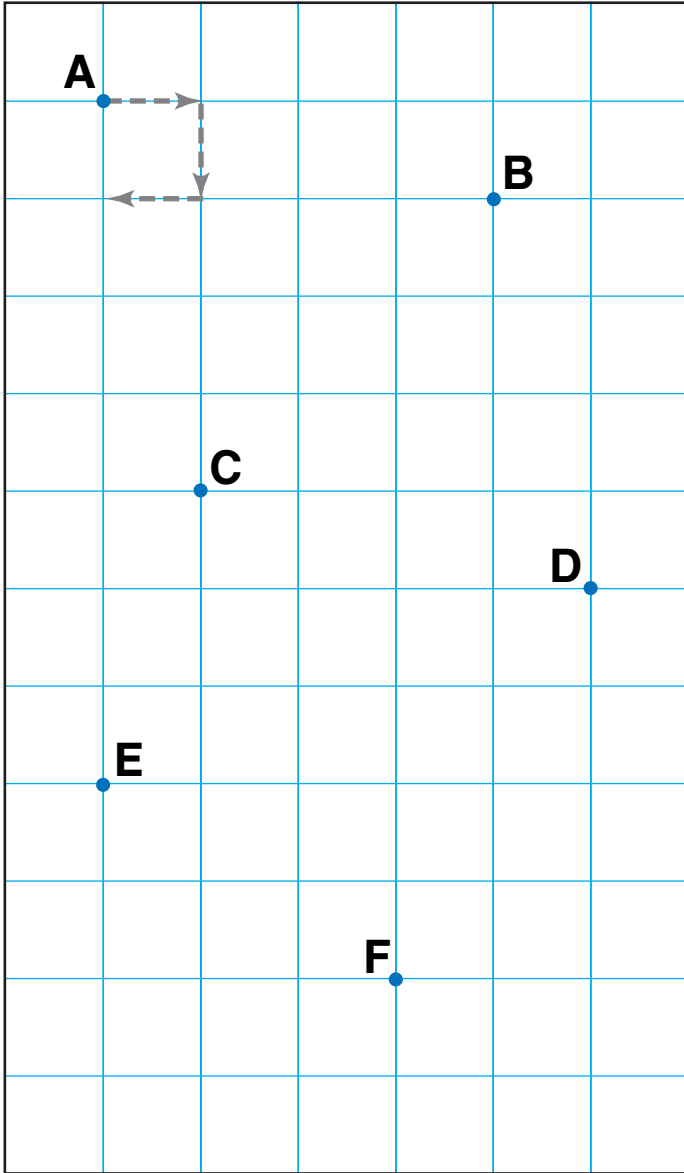


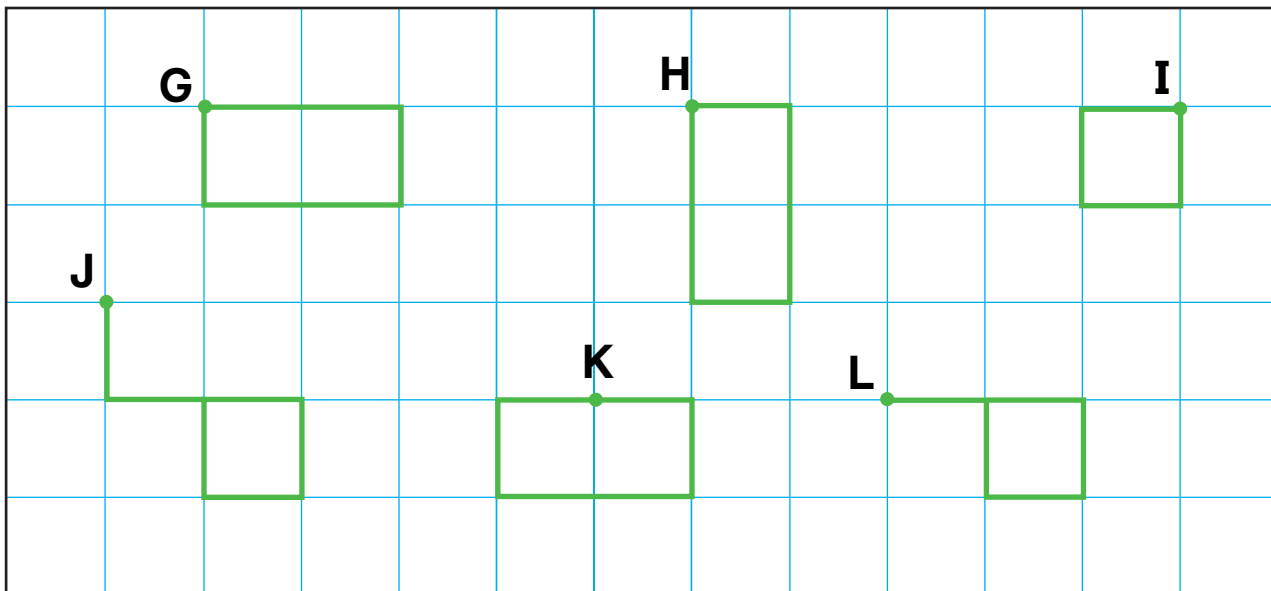
Paths and Figures on a Grid

NCTM Standards 3, 6, 9, 10

I. Start at the dot. Draw each path.



NOTE: Your child is learning to give and follow directions on a grid. Ask your child to tell you which paths on this page start and end at the same point.



2. Write the directions for making each figure.

G

→	→	↓			
---	---	---	--	--	--

H

--	--	--	--	--	--

I

--	--	--	--

J

--	--	--	--	--	--

K

--	--	--	--	--	--

L

--	--	--	--	--

Challenge

Look at the paths you drew on this page and on page 193.

3. Which paths start and end at the same point?

4. Draw \uparrow , \downarrow , \rightarrow , or \leftarrow to complete each sentence.

These paths use the same number of _____ as _____.

These paths use the same number of _____ as _____.