

Sums to 15

NCTM Standards 1, 2, 6, 7, 8, 9, 10

What number sentence does each train show?

1.



$$4 + 9 = 13$$

2.



3.




4.



5. Draw rods to show 13, 14, or 15.

Write a number sentence.

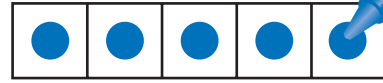





NOTE: Your child is learning to break apart numbers to make them easier to add. Ask your child to explain how to find $8 + 6$ by making a group of ten.


Draw dots to show each addend.
Write the missing numbers.

6. $8 + 7$




10 + _____ = _____

7. $5 + 9$



10 + _____ = _____

8. $7 + 6$



10 + _____ = _____

Problem Solving

9. Jenna has 8 toy animals in a case on her wall. She has 6 more on her bed. How many animals does she have? Explain how you know.



_____ animals
