





What doubles facts can you use to find the sum?

3. $6 + 7 = \underline{\hspace{2cm}}$

The sum is 1 more than



 +  = .

The sum is 1 less than

 +  = .


4. $7 + 8 = \underline{\hspace{2cm}}$

The sum is 1 more than

 +  = .

The sum is 1 less than

 +  = .

 5. How would you use a doubles fact to find $9 + 8$?

Challenge

6. How many rectangles can you draw that show 18?

 rectangles

Use words, numbers, or pictures to explain your answer.