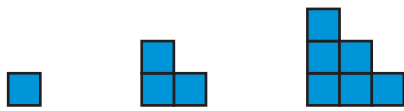
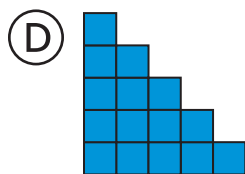
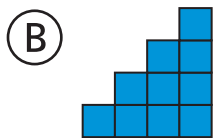
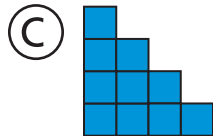
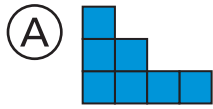


Problem Solving Test Prep

1. Mary made a design with tiles.



Which figure is next?



2. Josh had 12 marbles. He lost some of them. Now he has 6 marbles left. How many marbles did Josh lose?

(A) 6

(B) 12

(C) 18

(D) 24



Show What You Know

3. Kari, Rico, and Jordan ran a race. Jordan beat Rico. Kari beat Jordan. Who won the race?

Explain how you know your answer is correct.

4. There are 20 children in Mrs. Park's class. There are 4 more boys than girls. How many boys and girls are in the class?

_____ boys _____ girls

Explain how you solved the problem.

