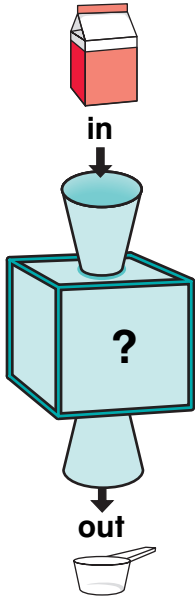


Conversion Rules

NCTM Standards 1, 2, 3, 4, 6, 7, 8, 9, 10

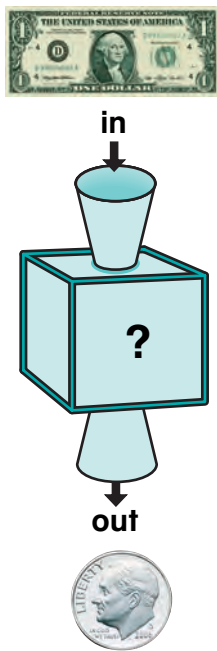
Write the missing numbers.

1.



Number of pints	1	2	3	4	7	
Number of cups	2	4	6			20

2.



\$1	1	2	3	4		10
D	10	20	30		80	



NOTE: Your child is learning to convert from one unit to another. Ask your child to explain how he or she solved each of the problems.

Write the missing numbers.
Use a calculator if you like.

3.

Number of quarters	1	2	3	6	10	4	
Number of nickels	5	10	15				25

4.


Number of gallons	1	3	10	2	5	6	
Number of quarts	4	12	40				16

Challenge

5.

Number of yards	1	2	3	5	7	
Number of feet	3	6	9			18

6. What is the rule? _____

 7. Explain how you found the missing numbers.
