

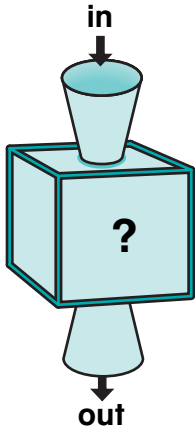
Chapter 15

Review/Assessment

NCTM Standards 1, 2, 3, 4, 6, 7, 8, 9, 10

Write the missing numbers.
What is the rule? Lessons 1, 2, 3, and 4

1.



in	4	12	10		2	21
out	8	16	14	5		

The rule is _____.

Write the missing numbers. Lesson 5


2.

Number of quarts	1	2	3	5		7	
Number of cups	4	8	12		40		16

What is the cost? Lessons 6 and 7

3. One of these costs _____¢.

4. Three of these cost _____¢.



Skip-count on the grid below. Lesson 8

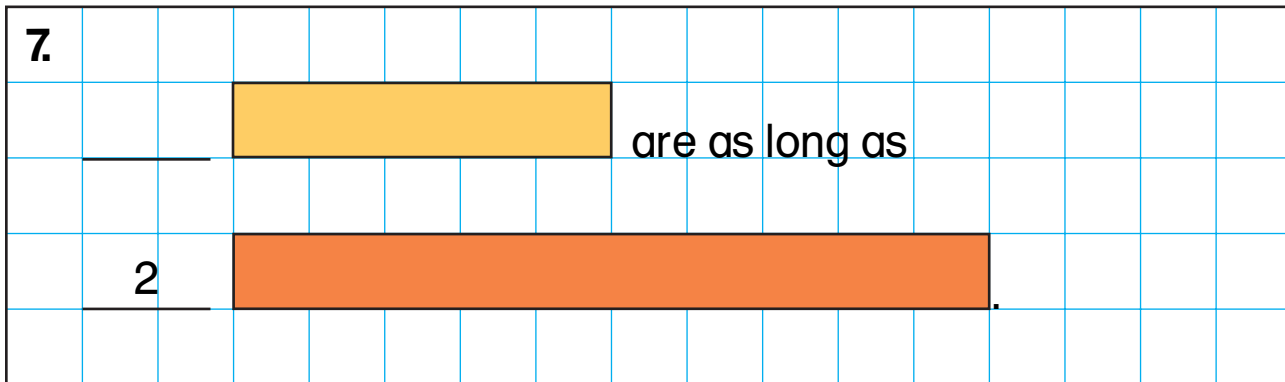
5. Mark jumps of 3 with an X.
Mark jumps of 4 with an O.

1	2	3	4	5	6	7	8	9	10
11	12	13	14	15	16	17	18	19	20
21	22	23	24	25	26	27	28	29	30

6. Where do the jumps above meet? Lesson 8

Find .

Write the missing number. Lesson 9



Problem Solving Lesson 10

8. Carla had some coins.
She found 23¢ more.
Then she spent 12¢.
Now Carla has 26¢.
How much did Carla start with?

_____¢