


Counting Money

P is a penny, worth 1¢. **N** is a nickel, worth 5¢.

How many coins are there?
What is the value?

1. 


_____ coin

_____ ¢

2. 


_____ coin

_____ ¢

3. 


_____ coins

_____ ¢

4. 


_____ coins

_____ ¢

5. 


_____ coins

_____ ¢

6. 


_____ coins

_____ ¢

7. 


_____ coins

_____ ¢

8. 

_____ coins

_____ ¢

9. 

_____ coins

_____ ¢