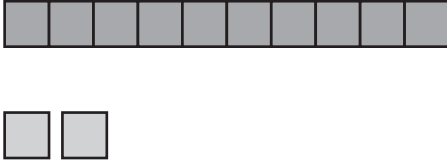
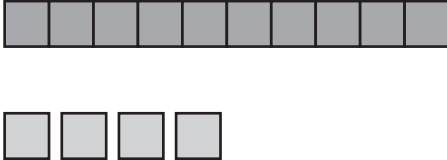


Ten and Some More

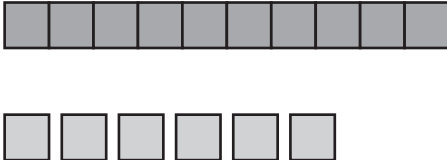
What numbers are missing?

1. 

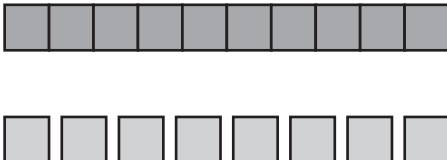
$$\begin{array}{r} 10 \\ + 2 \\ \hline 12 \end{array}$$

2. 

$$\begin{array}{r} 10 \\ + \square \\ \hline \square \end{array}$$

3. 

$$\begin{array}{r} \square \\ + 6 \\ \hline \square \end{array}$$

4. 

$$\begin{array}{r} \square \\ + \square \\ \hline 18 \end{array}$$