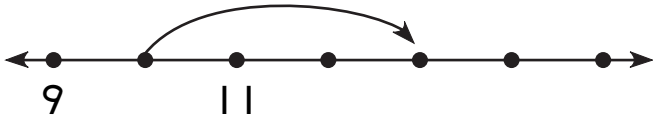


Tens on the Number Line

Write the numbers to match each jump.

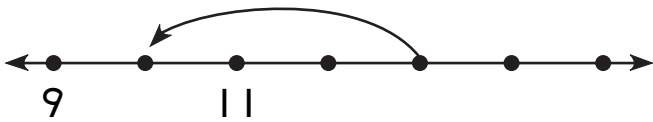
1.



10

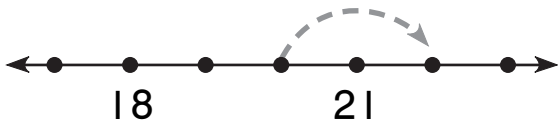
+3

2.



Draw the jump. Complete the number sentence.

3.



$$\boxed{20} + \boxed{} = \boxed{22}$$

4.



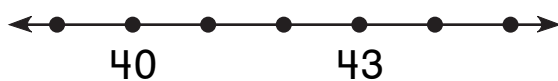
$$\boxed{30} + \boxed{} = \boxed{35}$$

5.



$$\boxed{} + \boxed{3} = \boxed{33}$$

6.



$$\boxed{} + \boxed{} = \boxed{43}$$